

Şekil Sayı Eşleştirme



= 8



= 5



= 3



= 7



= 2



= 4



= 9



= 1



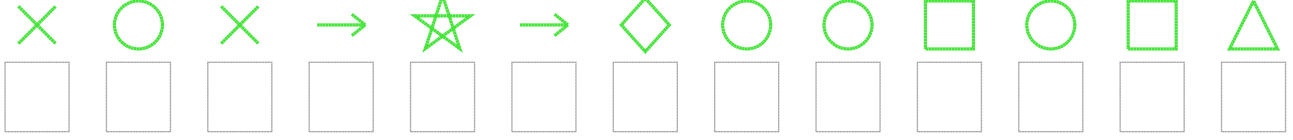
= 6



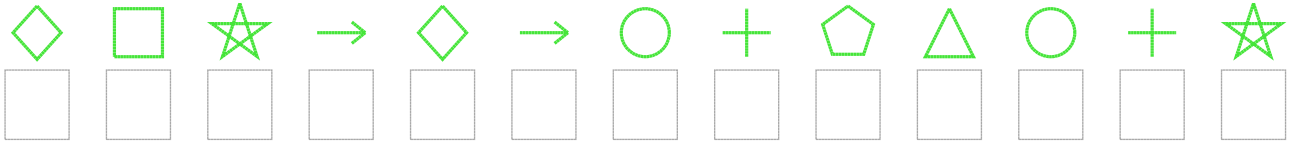
= 0

Aşağıdaki uzun şifreleri hatasız çözerek altlarına yazın:

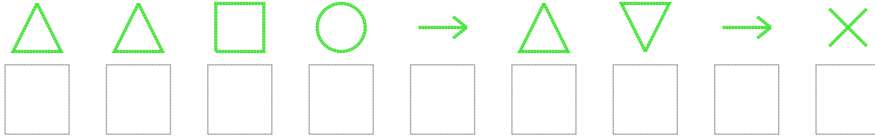
1. Şifre



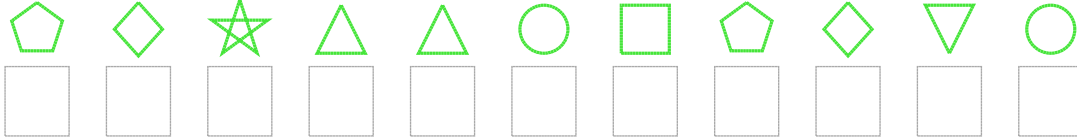
2. Şifre



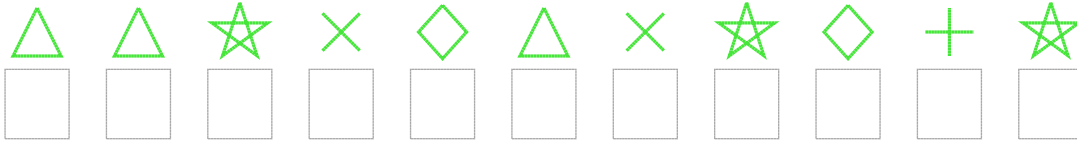
3. Şifre



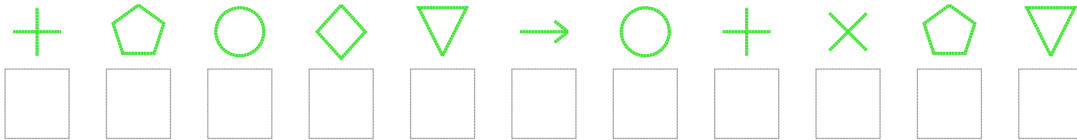
4. Şifre



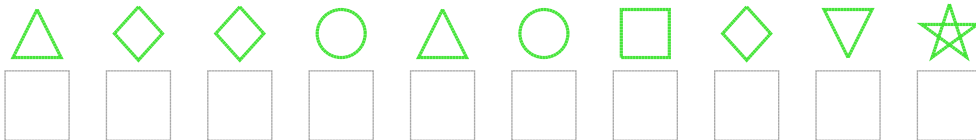
5. Şifre



6. Şifre



7. Şifre



□ BONUS: 5. ve 1. şifrenin üçüncü rakamının toplamı kaçtır?

Cevap Anahtarı

1. Şifre: 7172426118180

2. Şifre: 6842621390134

3. Şifre: 008120527

4. Şifre: 96400189651

5. Şifre: 00476074634

6. Şifre: 39165213795

7. Şifre: 0661018654

□ Bonus Soru Cevabı: 11